

© International Baccalaureate Organization 2022

All rights reserved. No part of this product may be reproduced in any form or by any electronic or mechanical means, including information storage and retrieval systems, without the prior written permission from the IB. Additionally, the license tied with this product prohibits use of any selected files or extracts from this product. Use by third parties, including but not limited to publishers, private teachers, tutoring or study services, preparatory schools, vendors operating curriculum mapping services or teacher resource digital platforms and app developers, whether fee-covered or not, is prohibited and is a criminal offense.

More information on how to request written permission in the form of a license can be obtained from <https://ibo.org/become-an-ib-school/ib-publishing/licensing/applying-for-a-license/>.

© Organisation du Baccalauréat International 2022

Tous droits réservés. Aucune partie de ce produit ne peut être reproduite sous quelque forme ni par quelque moyen que ce soit, électronique ou mécanique, y compris des systèmes de stockage et de récupération d'informations, sans l'autorisation écrite préalable de l'IB. De plus, la licence associée à ce produit interdit toute utilisation de tout fichier ou extrait sélectionné dans ce produit. L'utilisation par des tiers, y compris, sans toutefois s'y limiter, des éditeurs, des professeurs particuliers, des services de tutorat ou d'aide aux études, des établissements de préparation à l'enseignement supérieur, des fournisseurs de services de planification des programmes d'études, des gestionnaires de plateformes pédagogiques en ligne, et des développeurs d'applications, moyennant paiement ou non, est interdite et constitue une infraction pénale.

Pour plus d'informations sur la procédure à suivre pour obtenir une autorisation écrite sous la forme d'une licence, rendez-vous à l'adresse <https://ibo.org/become-an-ib-school/ib-publishing/licensing/applying-for-a-license/>.

© Organización del Bachillerato Internacional, 2022

Todos los derechos reservados. No se podrá reproducir ninguna parte de este producto de ninguna forma ni por ningún medio electrónico o mecánico, incluidos los sistemas de almacenamiento y recuperación de información, sin la previa autorización por escrito del IB. Además, la licencia vinculada a este producto prohíbe el uso de todo archivo o fragmento seleccionado de este producto. El uso por parte de terceros —lo que incluye, a título enunciativo, editoriales, profesores particulares, servicios de apoyo académico o ayuda para el estudio, colegios preparatorios, desarrolladores de aplicaciones y entidades que presten servicios de planificación curricular u ofrezcan recursos para docentes mediante plataformas digitales—, ya sea incluido en tasas o no, está prohibido y constituye un delito.

En este enlace encontrará más información sobre cómo solicitar una autorización por escrito en forma de licencia: <https://ibo.org/become-an-ib-school/ib-publishing/licensing/applying-for-a-license/>.

**Chemistry**  
**Higher level**  
**Paper 2**

Wednesday 18 May 2022 (afternoon)

Candidate session number

2 hours 15 minutes

--	--	--	--	--	--	--	--	--	--

**Instructions to candidates**

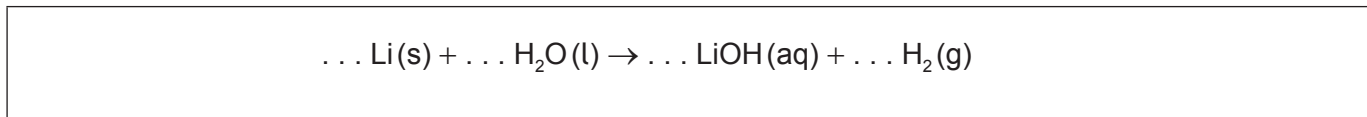
- Write your session number in the boxes above.
- Do not open this examination paper until instructed to do so.
- Answer all questions.
- Answers must be written within the answer boxes provided.
- A calculator is required for this paper.
- A clean copy of the **chemistry data booklet** is required for this paper.
- The maximum mark for this examination paper is **[90 marks]**.



Answer **all** questions. Answers must be written within the answer boxes provided.

1. Lithium reacts with water to form an alkaline solution.

(a) Determine the coefficients that balance the equation for the reaction of lithium with water. [1]



(b) A 0.200g piece of lithium was placed in 500.0 cm<sup>3</sup> of water.

(i) Calculate the molar concentration of the resulting solution of lithium hydroxide. [2]

.....  
.....  
.....  
.....

(ii) Calculate the volume of hydrogen gas produced, in cm<sup>3</sup>, if the temperature was 22.5 °C and the pressure was 103 kPa. Use sections 1 and 2 of the data booklet. [2]

.....  
.....  
.....  
.....  
.....  
.....

(iii) Suggest a reason why the volume of hydrogen gas collected was smaller than predicted. [1]

.....  
.....

(This question continues on the following page)



**(Question 1 continued)**

- (c) The reaction of lithium with water is a redox reaction. Identify the oxidizing agent in the reaction giving a reason. [1]

.....  
.....

- (d) Describe two observations that indicate the reaction of lithium with water is exothermic. [2]

.....  
.....  
.....  
.....  
.....



2. Electrons are arranged in energy levels around the nucleus of an atom.

(a) Explain why the first ionization energy of calcium is greater than that of potassium. [2]


.....

.....

.....

.....

(b) The diagram represents possible electron energy levels in a hydrogen atom.



(i) All models have limitations. Suggest **two** limitations to this model of the electron energy levels. [2]

.....

.....

.....

.....

.....

.....

(This question continues on the following page)



**(Question 2 continued)**

- (ii) Draw an arrow, labelled **X**, to represent the electron transition for the ionization of a hydrogen atom in the ground state. [1]
  
- (iii) Draw an arrow, labelled **Z**, to represent the lowest energy electron transition in the visible spectrum. [1]



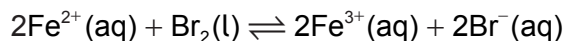
Please **do not** write on this page.

Answers written on this page  
will not be marked.



3. Standard electrode potential values,  $E^\ominus$ , can be used to predict spontaneity.

(a) (i) Iron(II) is oxidized by bromine.



Calculate the  $E^\ominus_{\text{cell}}$ , in V, for the reaction using section 24 of the data booklet. [1]

.....  
.....

(ii) Determine, giving a reason, if iodine will also oxidize iron(II). [1]

.....  
.....  
.....

(b) (i) Molten zinc chloride undergoes electrolysis in an electrolytic cell at 450 °C.

Deduce the half-equations for the reaction at each electrode. [2]

Cathode (negative electrode):  
.....  
.....

Anode (positive electrode):  
.....  
.....

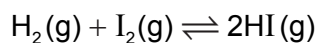
(ii) Deduce the overall cell reaction including state symbols. Use section 7 of the data booklet. [2]

.....  
.....





4. Hydrogen and iodine react to form hydrogen iodide.



(a) The following experimental data was obtained.

Experiment	Initial concentration of $\text{H}_2$ / $\text{mol dm}^{-3}$	Initial concentration of $\text{I}_2$ / $\text{mol dm}^{-3}$	Initial rate / $\text{mol dm}^{-3} \text{s}^{-1}$
1	$2.0 \times 10^{-3}$	$3.0 \times 10^{-3}$	$1.2 \times 10^{-6}$
2	$6.0 \times 10^{-3}$	$3.0 \times 10^{-3}$	$3.6 \times 10^{-6}$
3	$6.0 \times 10^{-3}$	$6.0 \times 10^{-3}$	$7.2 \times 10^{-6}$

(i) Deduce the order of reaction with respect to hydrogen. [1]

.....

(ii) Deduce the rate expression for the reaction. [1]

.....  
.....  
.....

(iii) Calculate the value of the rate constant stating its units. [2]

.....  
.....  
.....  
.....  
.....

(This question continues on the following page)



(Question 4 continued)

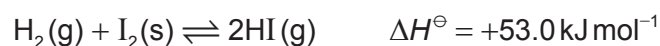
- (b) State **two** conditions necessary for a successful collision between reactants. [1]

.....  
.....  
.....

- (c) State the equilibrium constant expression,  $K_c$ , for this reaction. [1]

.....  
.....  
.....

- (d) Consider the reaction of hydrogen with solid iodine.



- (i) Calculate the entropy change of reaction,  $\Delta S^\ominus$ , in  $\text{J K}^{-1} \text{ mol}^{-1}$ . [1]

	$S^\ominus / \text{J K}^{-1} \text{ mol}^{-1}$
$\text{H}_2(\text{g})$	130.6
$\text{I}_2(\text{s})$	116.1
$\text{HI}(\text{g})$	206.6

.....  
.....  
.....

- (ii) Predict, giving a reason, how the value of the  $\Delta S^\ominus_{\text{reaction}}$  would be affected if  $\text{I}_2(\text{g})$  were used as a reactant. [1]

.....  
.....  
.....

(This question continues on the following page)



**(Question 4 continued)**

- (iii) Calculate the Gibbs free energy change,  $\Delta G^\ominus$ , in  $\text{kJ mol}^{-1}$ , for the reaction at 298 K. Use section 1 of the data booklet.

[1]

.....

.....

.....

- (iv) Calculate the equilibrium constant,  $K_c$ , for this reaction at 298 K. Use your answer to (d)(iii) and sections 1 and 2 of the data booklet.

(If you did not obtain an answer to (d)(iii) use a value of  $2.0 \text{ kJ mol}^{-1}$ , although this is not the correct answer).

[2]

.....

.....

.....



5. Iron(II) disulfide,  $\text{FeS}_2$ , has been mistaken for gold.

(a) (i) State the full electronic configuration of  $\text{Fe}^{2+}$ . [1]

.....  
.....

(ii) Explain why there is a large increase from the 8th to the 9th ionization energy of iron. [2]

.....  
.....  
.....  
.....

(b) Calculate the oxidation state of sulfur in iron(II) disulfide,  $\text{FeS}_2$ . [1]

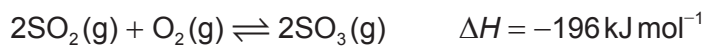
.....  
.....

(c) Describe the bonding in iron,  $\text{Fe(s)}$ . [1]

.....



6. Sulfur trioxide is produced from sulfur dioxide.



(a) Outline, giving a reason, the effect of a catalyst on a reaction. [2]

.....


.....

.....

.....

(b) The reaction between sulfur dioxide and oxygen can be carried out at different temperatures.

(i) On the axes, sketch Maxwell-Boltzmann energy distribution curves for the reacting species at two temperatures  $T_1$  and  $T_2$ , where  $T_2 > T_1$ . [3]



(ii) Explain the effect of increasing temperature on the yield of  $\text{SO}_3$ . [2]

.....

.....

.....

.....

(This question continues on the following page)



**(Question 6 continued)**

(c) (i) Draw the Lewis structure of  $\text{SO}_3$ . [1]

(ii) Explain the electron domain geometry of  $\text{SO}_3$ . [2]

.....

.....

.....

(d) (i) State the product formed from the reaction of  $\text{SO}_3$  with water. [1]

.....

.....

(ii) State the meaning of a strong Brønsted-Lowry acid. [2]

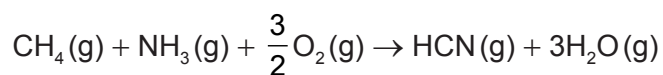
.....

.....

.....



7. The overall equation for the production of hydrogen cyanide, HCN, is shown below.



(a) (i) State why  $\text{NH}_3$  is a Lewis base. [1]

.....  
.....

(ii) Calculate the pH of a  $1.00 \times 10^{-2} \text{ mol dm}^{-3}$  aqueous solution of ammonia.

$\text{p}K_{\text{b}} = 4.75$  at 298 K. [3]

.....  
.....  
.....  
.....  
.....  
.....  
.....

(iii) Justify whether a  $1.0 \text{ dm}^3$  solution made from 0.10 mol  $\text{NH}_3$  and 0.20 mol HCl will form a buffer solution. [1]

.....  
.....  
.....

(This question continues on the following page)



**(Question 7 continued)**

(b) (i) Sketch the shape of one sigma ( $\sigma$ ) and one pi ( $\pi$ ) bond. [2]

Sigma ( $\sigma$ ):

Pi ( $\pi$ ):

(ii) Identify the number of sigma and pi bonds in HCN. [1]

Sigma ( $\sigma$ ):

.....

Pi ( $\pi$ ):

.....

(iii) State the hybridization of the carbon atom in HCN. [1]

.....

**(This question continues on the following page)**





(Question 7 continued)

- (c) Suggest why hydrogen chloride, HCl, has a lower boiling point than hydrogen cyanide, HCN. [1]

	$M_r$	Boiling point
HCN	27.03	26.00 °C
HCl	36.51	-85.05 °C

.....

.....

.....

- (d) Explain why transition metal cyanide complexes are coloured. [3]

.....

.....

.....

.....

.....

.....

8. Carbon forms many compounds.

- (a)  $C_{60}$  and diamond are allotropes of carbon.
- (i) Outline **two** differences between the bonding of carbon atoms in  $C_{60}$  and diamond. [2]

.....

.....

.....

.....

(This question continues on the following page)



**(Question 8 continued)**

(ii) Explain why  $C_{60}$  and diamond sublime at different temperatures and pressures. [2]

.....

.....

.....

.....

.....

.....

(b) (i) State two features showing that propane and butane are members of the same homologous series. [2]

.....

.....

.....

.....

(ii) Suggest the fragment causing peak **R** in the mass spectrum of butane. [1]

Removed for copyright reasons

.....

**(This question continues on the following page)**



**(Question 8 continued)**

- (c) Describe a test and the expected result to indicate the presence of carbon-carbon double bonds. [2]

Test:

.....

.....

Result:

.....

.....

- (d) (i) Draw the full structural formula of (Z)-but-2-ene. [1]

.....

- (ii) Write the equation for the reaction between but-2-ene and hydrogen bromide. [2]

.....

.....

- (iii) State the type of reaction. [1]

.....

**(This question continues on the following page)**



**(Question 8 continued)**

- (iv) Suggest **two** differences in the  $^1\text{H}$  NMR of but-2-ene and the organic product from (d)(ii). [2]

.....

.....

.....

.....

.....

- (v) Predict, giving a reason, the major product of reaction between but-1-ene and steam. [2]

.....

.....

.....

.....

- (e) (i) Explain the mechanism of the reaction between 1-bromopropane,  $\text{CH}_3\text{CH}_2\text{CH}_2\text{Br}$ , and aqueous sodium hydroxide,  $\text{NaOH}(\text{aq})$ , using curly arrows to represent the movement of electron pairs. [4]

.....

.....

.....

.....

.....

.....

.....

.....

.....

.....

- (ii) Deduce the splitting pattern in the  $^1\text{H}$  NMR spectrum for 1-bromopropane. [1]

.....

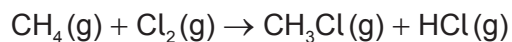
.....

**(This question continues on the following page)**



**(Question 8 continued)**

(f) Chlorine reacts with methane.



(i) Calculate the enthalpy change of the reaction,  $\Delta H$ , using section 11 of the data booklet.

[3]

.....

.....

.....

.....

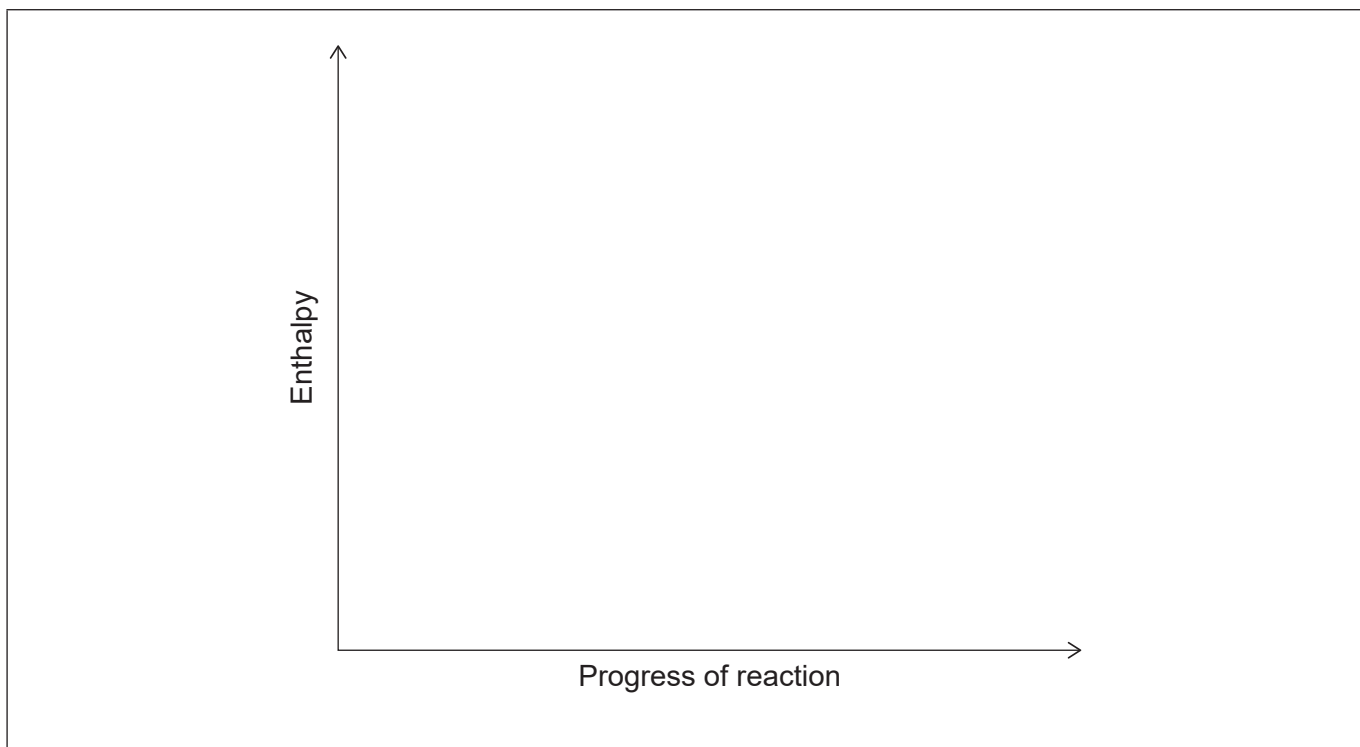
.....

.....

.....

(ii) Draw and label an enthalpy level diagram for this reaction.

[2]



**References:**

All other texts, graphics and illustrations © International Baccalaureate Organization 2022

